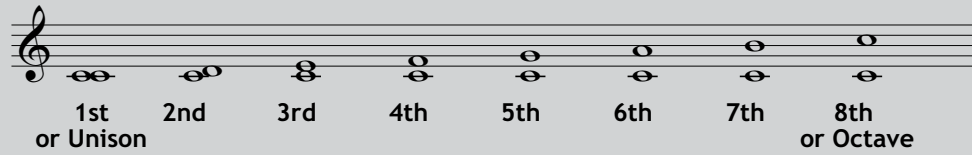


Intervals

An **Interval** is the distance between two notes.

In level one we learned to name intervals by number:



Intervals can also have a **classification**, which describes them more accurately.


Perfect Intervals

The intervals of a unison, fourth, fifth or octave can be described as perfect intervals.




Perfect intervals can be labelled as P1, P4, P5, and P8.


Draw the interval of a perfect fifth above these notes:



Draw the interval of a perfect octave above these notes:



Name these intervals by number and classification:



Complete this sentence:

The intervals of a _____, _____, _____ and _____ are described as perfect intervals.