

TREASURE ISLAND CLUES RHYTHM LEVEL 1




























Use the beat sums and the note/directions to find the letters (on the TreasureLetter sheet - start from level 1 skull marker) that spell the answer to your musical trivia question:

WHICH FAMOUS CLARINET PLAYER LEARNED TO PLAY THE CLARINET WHILE IN PRISON?

(fill in your answer at bottom of this page)

ADD (OR SUBTRACT!) THE CROTCHET BEATS. WRITE THE NUMBER IN THE BOX

Write in beat count

1	 +  +  =	<div style="border: 1px solid black; padding: 2px; display: inline-block;">4</div>	put with directional clue below to get letter from Treasure Letter sheet
2	 +  +  =	<div style="border: 1px solid black; padding: 2px; display: inline-block;">4</div>	
3	 +  +  =	<div style="border: 1px solid black; padding: 2px; display: inline-block;">3</div>	
4	 +  +  =	<div style="border: 1px solid black; padding: 2px; display: inline-block;">3</div>	
5	 +  +  =	<div style="border: 1px solid black; padding: 2px; display: inline-block;">5</div>	
6	 +  +  +  =	<div style="border: 1px solid black; padding: 2px; display: inline-block;">6</div>	
7	 +  +  -  =	<div style="border: 1px solid black; padding: 2px; display: inline-block;">7</div>	
8	 +  +  -  =	<div style="border: 1px solid black; padding: 2px; display: inline-block;">6</div>	

NAME THE NOTE (CHECK THE CLEF!) Use the Note + Direction Finder box at right to convert to a direction for the TreasureLetter sheet

1 2 3 4



Write in note and direction

<div style="border: 1px solid black; padding: 2px; display: inline-block;">A North</div>	<div style="border: 1px solid black; padding: 2px; display: inline-block;">middle C North West</div>	<div style="border: 1px solid black; padding: 2px; display: inline-block;">E East</div>	<div style="border: 1px solid black; padding: 2px; display: inline-block;">G West</div>
--	--	---	---

put with beat count clue above to get letter from Treasure Letter sheet

5 6 7 8



Write in note and direction

<div style="border: 1px solid black; padding: 2px; display: inline-block;">E South</div>	<div style="border: 1px solid black; padding: 2px; display: inline-block;">B North East</div>	<div style="border: 1px solid black; padding: 2px; display: inline-block;">D South East</div>	<div style="border: 1px solid black; padding: 2px; display: inline-block;">F South West</div>
--	---	---	---



NOTE + DIRECTION FINDER

Note	Direction
A	N (North)
B	NE (North East)
C	E (East)
D	SE (South-East)
E	S (South)
F	SW (South-West)
G	W (West)
middle C	NW (North West)

WHICH FAMOUS CLARINET PLAYER LEARNED TO PLAY THE CLARINET WHILE IN PRISON?

a k e r b i l k














1 2 3 4 5 6 7 8

TREASURE ISLAND CLUES INTERVALS LEVEL 1

Work out the musical interval & write the number in the square box. Then name the higher note, use that letter to get a direction (from the Note + Direction Finder box). Use the number and the letter to find the TreasureLetters (from other sheet - start at level1 skull) that spell the answer to

WHAT IS THE NAME OF THE VERY FIRST INSTRUMENT? (fill in your answer at the bottom of this page)

WRITE THE NUMBER OF THE INTERVAL, THEN WRITE THE NAME OF THE HIGHER NOTE

		Interval gives number of steps on other sheet	Name of higher note and matching direction (see box below)		Interval gives number of steps on other sheet	Name of higher note and matching direction (see box below)
1		2	middle C North West	9		2 E South
2		6	C East	10		1 G West
3		3	B North East	11		2 A North
4		3	A North	12		6 G West
5		5	B North East	13		7 D South East
6		3	C East			
7		2	D South East			
8		8	E South			

NOTE + DIRECTION FINDER

Note	Direction
A	N (North)
B	NE (North East)
C	E (East)
D	SE (South-East)
E	S (South)
F	SW (South-West)
G	W (West)
middle C	NW (North West)



WHAT IS THE NAME OF THE VERY FIRST INSTRUMENT?

t h e h u m a n v o i c e

1 2 3 4 5 6 7 8 9 10 11 12 13

TREASURE ISLAND CLUES MELODY LEVEL 1

These are Slurs
play smoothly and well connected

These are Ties
joins the length of the two notes together

Slurs occur over notes of different pitches

Ties occur only between notes of the same pitch

Count the number of ties in the melody & write the number in the square box, this will be your distance. Then name the final note to get a direction (from the Note + Direction Finder box). Use the number and the letter to find the TreasureLetters (from other sheet - start from level1 skull) that spell the answer to

WHAT IS THE NICKNAME OF FAMOUS BEE-BOP MUSICIAN CHARLIE PARKER?

(fill in your answer at the bottom of this page)

WRITE THE NUMBER OF TIES, THEN THE NAME OF THE FINAL NOTE

Quantity of ties gives number of steps on other sheet

Name of final note and matching direction (see box below)

1		5	E South
2		2	D South East
3		3	G West
4		2	high D North West
5		4	Bb North East
6		4	F South West
7		2	F South West
8		4	E South

WHAT IS THE NICKNAME OF FAMOUS BEE-BOP MUSICIAN CHARLIE PARKER?

y a r d b i r d

1 2 3 4 5 6 7 8



NOTE + DIRECTION FINDER

Note	Direction
A	N (North)
Bb	NE (North East)
C	E (East)
D	SE (South-East)
E	S (South)
F	SW (South-West)
G	W (West)
high D	NW (North West)

TREASURE ISLAND CLUES SCALES LEVEL 1

Add the key signature and clef to complete each scale, count the sharps or flats in the key signature to get your distance. Then name the "leading note" (7th note) to get a direction (from the LeadingNote + Direction Finder box). Use the number and the letter to find the TreasureLetters (from other sheet - start at level1 skull) that spell the answer to

WHICH BEATLE RECEIVED THE MOST FAN MAIL? (fill in your answer at the bottom of this page)

ADD KEY SIGNATURE AND CLEF TO COMPLETE EACH SCALE. COUNT THE SHARPS OR FLATS FOR YOUR DISTANCE. THEN USE THE LEADING NOTE+DIRECTION FINDER BELOW TO GET A DIRECTION

Quantity of sharps or flats gives number of steps on other sheet
Name of leading note and matching direction (see box below)

1	A major		3	G# North
2	B major		5	A# East
3	F major		1	E South
4	G major		1	F# West
5	D major		2	C# North East
6	F# major		6	E# West
7	E major		4	D# South East
8	Bb major		2	A South
9	C# major		7	B# North
10	Db major		5	C North

LEADING NOTE + DIRECTION FINDER

Leading Note	Direction
G#, B#, C	N (North)
B, C#	NE (North East)
A#, Bb, D	E (East)
D#	SE (South-East)
A, E	S (South)
F, Eb	SW (South-West)
E#, F#	W (West)
G	NW (North West)



WHICH BEATLE RECEIVED THE MOST FAN MAIL?

 r i n g o s t a r r

1 2 3 4 5 6 7 8 9 10