



Theory Assessment #1

Name these notes:




/20



/20

Write these notes:

G A D C F F# B Bb E



/10





/10

What is the name for the small lines notes above or below the staff are placed on?

/5

Draw a treble clef on this staff:

Draw a bass clef on this staff:



/5



/5

What is the correct term for the two stave music that is used for the piano?

/5

Draw a sharp on the top line of this treble stave:

Draw a flat on the middle line of this treble stave:



/5

/5

What does a sharp do to a note?

/5

What does a flat do to a note?

/5